

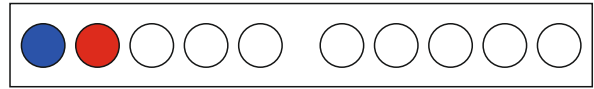
# Plusaufgaben im Zahlenraum bis 10

$$\_ + \_ = \_$$



www.mathemonsterchen.de

Wie heißt die Plusaufgabe ?

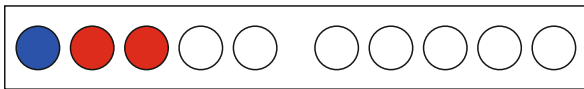


$$\_ + \_ = \_$$



www.mathemonsterchen.de

Wie heißt die Plusaufgabe ?

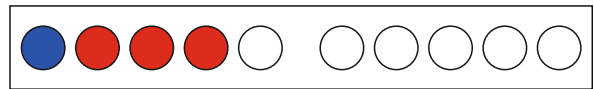


$$\_ + \_ = \_$$



www.mathemonsterchen.de

Wie heißt die Plusaufgabe ?

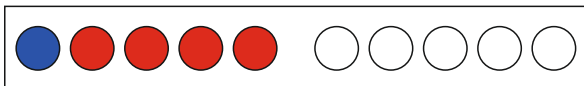


$$\_ + \_ = \_$$



www.mathemonsterchen.de

Wie heißt die Plusaufgabe ?

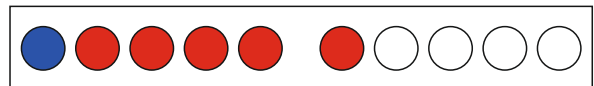


$$\_ + \_ = \_$$



www.mathemonsterchen.de

Wie heißt die Plusaufgabe ?

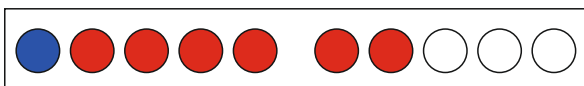


$$\_ + \_ = \_$$



www.mathemonsterchen.de

Wie heißt die Plusaufgabe ?

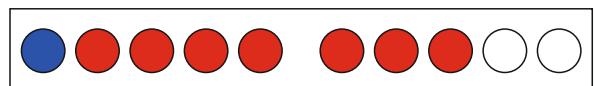


$$\_ + \_ = \_$$



www.mathemonsterchen.de

Wie heißt die Plusaufgabe ?



$$\_ + \_ = \_$$



www.mathemonsterchen.de

$$1 + 1 = 2$$

$$1 + 3 = 4$$

$$1 + 2 = 3$$

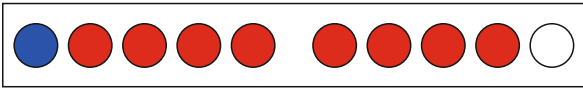
$$1 + 5 = 6$$

$$1 + 4 = 5$$

$$1 + 7 = 8$$

$$1 + 6 = 7$$

Wie heißt die Plusaufgabe ?

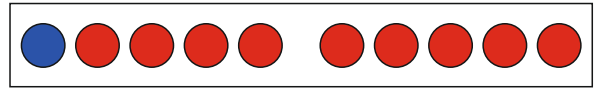


$$\underline{\quad} + \underline{\quad} = \underline{\quad}$$



[www.mathemonsterchen.de](http://www.mathemonsterchen.de)

Wie heißt die Plusaufgabe ?

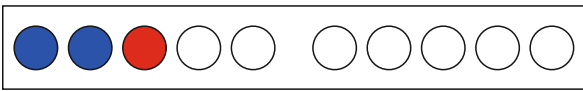


$$\underline{\quad} + \underline{\quad} = \underline{\quad}$$



[www.mathemonsterchen.de](http://www.mathemonsterchen.de)

Wie heißt die Plusaufgabe ?

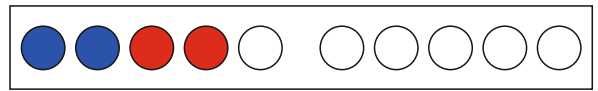


$$\underline{\quad} + \underline{\quad} = \underline{\quad}$$



[www.mathemonsterchen.de](http://www.mathemonsterchen.de)

Wie heißt die Plusaufgabe ?

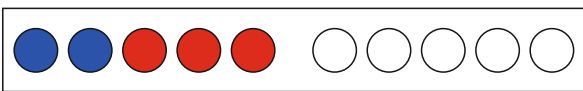


$$\underline{\quad} + \underline{\quad} = \underline{\quad}$$



[www.mathemonsterchen.de](http://www.mathemonsterchen.de)

Wie heißt die Plusaufgabe ?

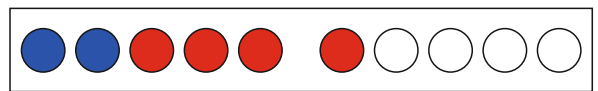


$$\underline{\quad} + \underline{\quad} = \underline{\quad}$$



[www.mathemonsterchen.de](http://www.mathemonsterchen.de)

Wie heißt die Plusaufgabe ?

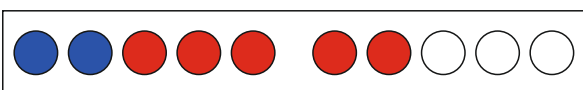


$$\underline{\quad} + \underline{\quad} = \underline{\quad}$$



[www.mathemonsterchen.de](http://www.mathemonsterchen.de)

Wie heißt die Plusaufgabe ?

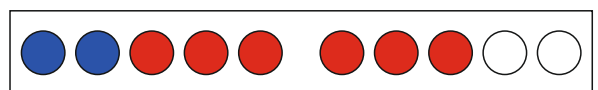


$$\underline{\quad} + \underline{\quad} = \underline{\quad}$$



[www.mathemonsterchen.de](http://www.mathemonsterchen.de)

Wie heißt die Plusaufgabe ?



$$\underline{\quad} + \underline{\quad} = \underline{\quad}$$



[www.mathemonsterchen.de](http://www.mathemonsterchen.de)

$$1 + 9 = 10$$

$$1 + 8 = 9$$

$$2 + 2 = 4$$

$$2 + 1 = 3$$

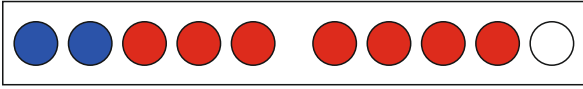
$$2 + 4 = 6$$

$$2 + 3 = 5$$

$$2 + 6 = 8$$

$$2 + 5 = 7$$

Wie heißt die Plusaufgabe ?

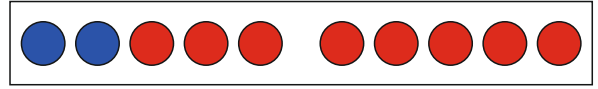


$$\underline{\quad} + \underline{\quad} = \underline{\quad}$$



[www.mathemonsterchen.de](http://www.mathemonsterchen.de)

Wie heißt die Plusaufgabe ?

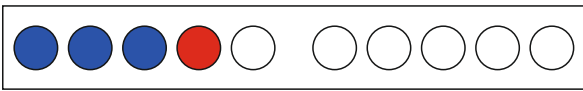


$$\underline{\quad} + \underline{\quad} = \underline{\quad}$$



[www.mathemonsterchen.de](http://www.mathemonsterchen.de)

Wie heißt die Plusaufgabe ?

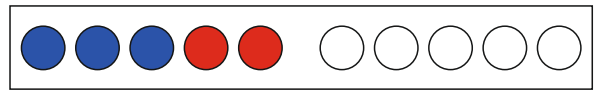


$$\underline{\quad} + \underline{\quad} = \underline{\quad}$$



[www.mathemonsterchen.de](http://www.mathemonsterchen.de)

Wie heißt die Plusaufgabe ?

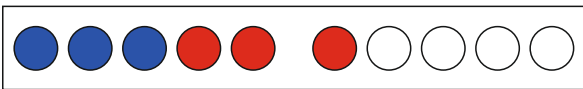


$$\underline{\quad} + \underline{\quad} = \underline{\quad}$$



[www.mathemonsterchen.de](http://www.mathemonsterchen.de)

Wie heißt die Plusaufgabe ?

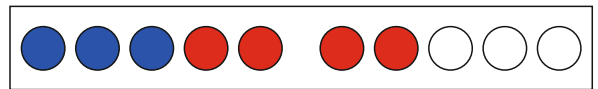


$$\underline{\quad} + \underline{\quad} = \underline{\quad}$$



[www.mathemonsterchen.de](http://www.mathemonsterchen.de)

Wie heißt die Plusaufgabe ?

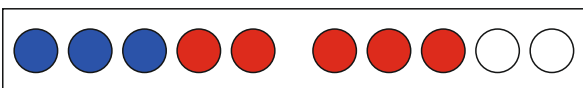


$$\underline{\quad} + \underline{\quad} = \underline{\quad}$$



[www.mathemonsterchen.de](http://www.mathemonsterchen.de)

Wie heißt die Plusaufgabe ?

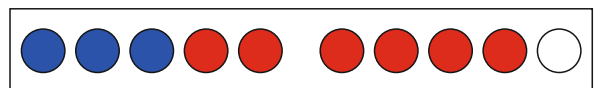


$$\underline{\quad} + \underline{\quad} = \underline{\quad}$$



[www.mathemonsterchen.de](http://www.mathemonsterchen.de)

Wie heißt die Plusaufgabe ?



$$\underline{\quad} + \underline{\quad} = \underline{\quad}$$



[www.mathemonsterchen.de](http://www.mathemonsterchen.de)

$$2 + 8 = 10$$

$$2 + 7 = 9$$

$$3 + 2 = 5$$

$$3 + 1 = 4$$

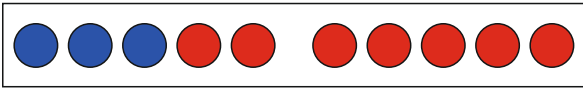
$$3 + 4 = 7$$

$$3 + 3 = 6$$

$$3 + 6 = 9$$

$$3 + 5 = 8$$

Wie heißt die Plusaufgabe ?

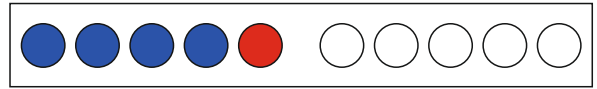


$$\underline{\quad} + \underline{\quad} = \underline{\quad}$$



[www.mathemonsterchen.de](http://www.mathemonsterchen.de)

Wie heißt die Plusaufgabe ?

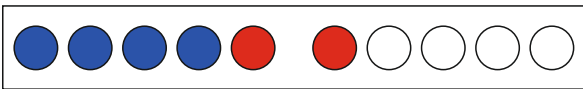


$$\underline{\quad} + \underline{\quad} = \underline{\quad}$$



[www.mathemonsterchen.de](http://www.mathemonsterchen.de)

Wie heißt die Plusaufgabe ?

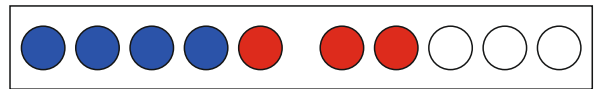


$$\underline{\quad} + \underline{\quad} = \underline{\quad}$$



[www.mathemonsterchen.de](http://www.mathemonsterchen.de)

Wie heißt die Plusaufgabe ?

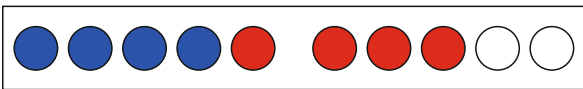


$$\underline{\quad} + \underline{\quad} = \underline{\quad}$$



[www.mathemonsterchen.de](http://www.mathemonsterchen.de)

Wie heißt die Plusaufgabe ?

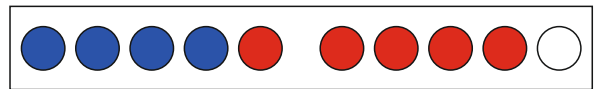


$$\underline{\quad} + \underline{\quad} = \underline{\quad}$$



[www.mathemonsterchen.de](http://www.mathemonsterchen.de)

Wie heißt die Plusaufgabe ?

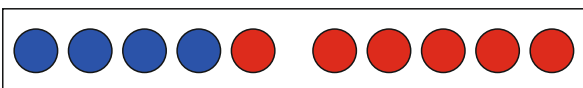


$$\underline{\quad} + \underline{\quad} = \underline{\quad}$$



[www.mathemonsterchen.de](http://www.mathemonsterchen.de)

Wie heißt die Plusaufgabe ?

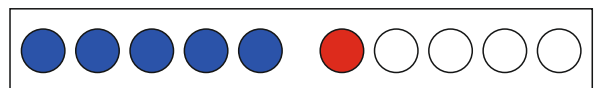


$$\underline{\quad} + \underline{\quad} = \underline{\quad}$$



[www.mathemonsterchen.de](http://www.mathemonsterchen.de)

Wie heißt die Plusaufgabe ?



$$\underline{\quad} + \underline{\quad} = \underline{\quad}$$



[www.mathemonsterchen.de](http://www.mathemonsterchen.de)

$$4 + 1 = 5$$

$$3 + 7 = 10$$

$$4 + 3 = 7$$

$$4 + 2 = 6$$

$$4 + 5 = 9$$

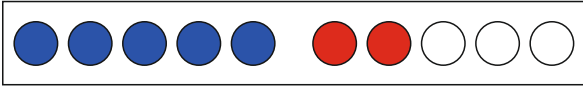
$$4 + 4 = 8$$

$$5 + 1 = 6$$

$$4 + 6 = 10$$



Wie heißt die Plusaufgabe ?

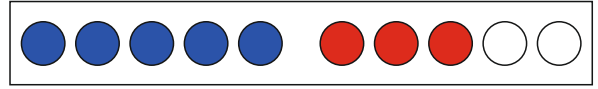


$$\underline{\quad} + \underline{\quad} = \underline{\quad}$$



[www.mathemonsterchen.de](http://www.mathemonsterchen.de)

Wie heißt die Plusaufgabe ?

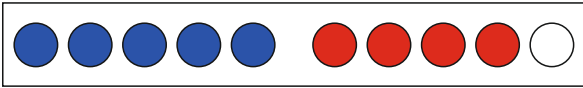


$$\underline{\quad} + \underline{\quad} = \underline{\quad}$$



[www.mathemonsterchen.de](http://www.mathemonsterchen.de)

Wie heißt die Plusaufgabe ?

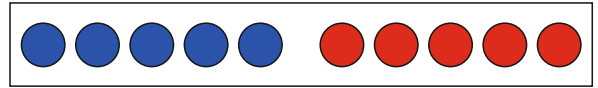


$$\underline{\quad} + \underline{\quad} = \underline{\quad}$$



[www.mathemonsterchen.de](http://www.mathemonsterchen.de)

Wie heißt die Plusaufgabe ?

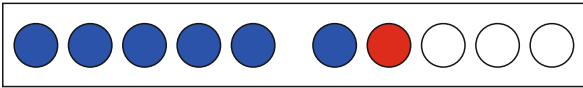


$$\underline{\quad} + \underline{\quad} = \underline{\quad}$$



[www.mathemonsterchen.de](http://www.mathemonsterchen.de)

Wie heißt die Plusaufgabe ?

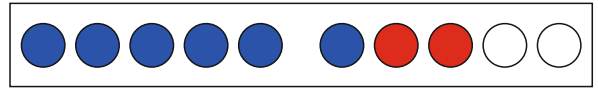


$$\underline{\quad} + \underline{\quad} = \underline{\quad}$$



[www.mathemonsterchen.de](http://www.mathemonsterchen.de)

Wie heißt die Plusaufgabe ?

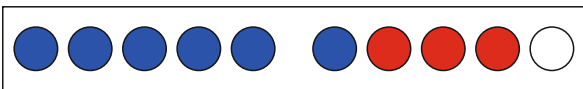


$$\underline{\quad} + \underline{\quad} = \underline{\quad}$$



[www.mathemonsterchen.de](http://www.mathemonsterchen.de)

Wie heißt die Plusaufgabe ?

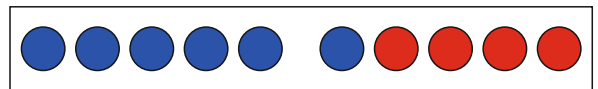


$$\underline{\quad} + \underline{\quad} = \underline{\quad}$$



[www.mathemonsterchen.de](http://www.mathemonsterchen.de)

Wie heißt die Plusaufgabe ?



$$\underline{\quad} + \underline{\quad} = \underline{\quad}$$



[www.mathemonsterchen.de](http://www.mathemonsterchen.de)

$$5 + 3 = 8$$

$$5 + 2 = 7$$

$$5 + 5 = 10$$

$$5 + 4 = 9$$

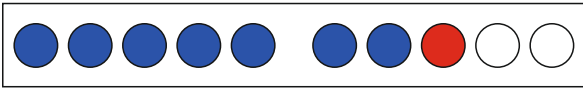
$$6 + 2 = 8$$

$$6 + 1 = 7$$

$$6 + 4 = 10$$

$$6 + 3 = 9$$

Wie heißt die Plusaufgabe ?

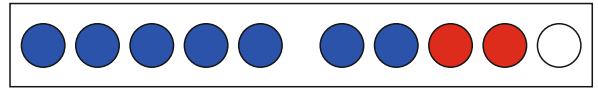


$$\_ + \_ = \_$$



[www.mathemonsterchen.de](http://www.mathemonsterchen.de)

Wie heißt die Plusaufgabe ?

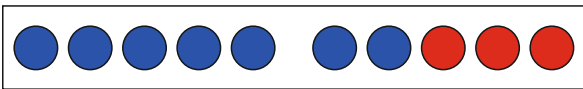


$$\_ + \_ = \_$$



[www.mathemonsterchen.de](http://www.mathemonsterchen.de)

Wie heißt die Plusaufgabe ?

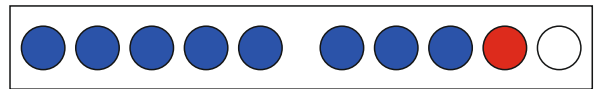


$$\_ + \_ = \_$$



[www.mathemonsterchen.de](http://www.mathemonsterchen.de)

Wie heißt die Plusaufgabe ?

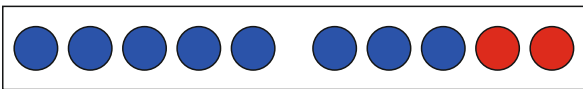


$$\_ + \_ = \_$$



[www.mathemonsterchen.de](http://www.mathemonsterchen.de)

Wie heißt die Plusaufgabe ?

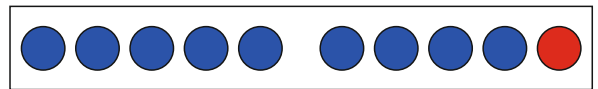


$$\_ + \_ = \_$$



[www.mathemonsterchen.de](http://www.mathemonsterchen.de)

Wie heißt die Plusaufgabe ?



$$\_ + \_ = \_$$



[www.mathemonsterchen.de](http://www.mathemonsterchen.de)

$$7 + 2 = 9$$

$$7 + 1 = 8$$

$$8 + 1 = 9$$

$$7 + 3 = 10$$

$$9 + 1 = 10$$

$$8 + 2 = 10$$