



10 Waagen - Rätsel



Wie viel Gramm wiegen sie ?

= ____ g = ____ g

www.mathemonsterchen.de

1

Wie viel Gramm wiegen sie ?

= ____ g

= ____ g

2


Wie viel Gramm wiegen sie ?

= ____ g

= ____ g


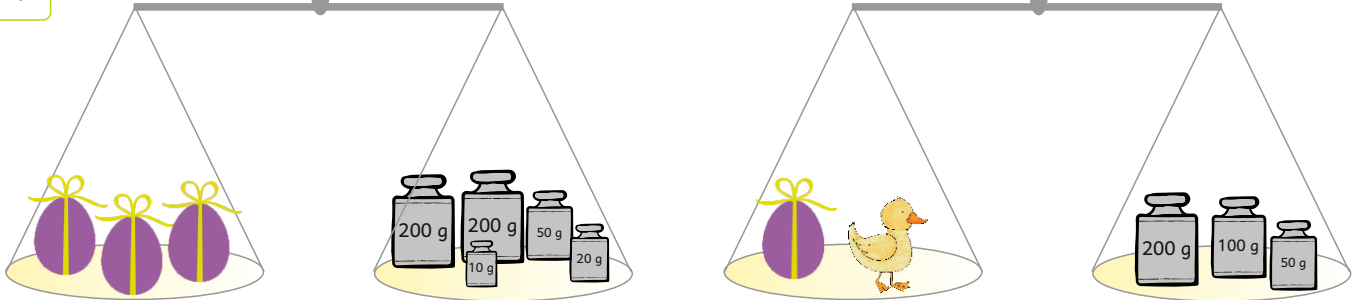
3

Wie viel Gramm wiegen sie ?





4

Wie viel Gramm wiegen sie ?



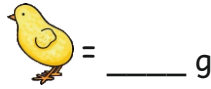
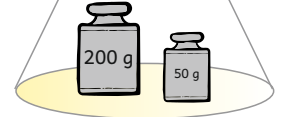
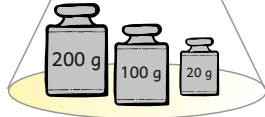
5

Wie viel Gramm wiegen sie ?



6


Wie viel Gramm wiegen sie ?



www.mathemonsterchen.de

7


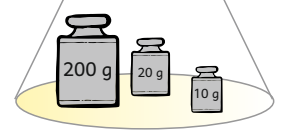
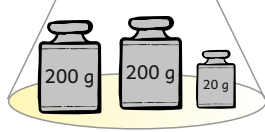
Wie viel Gramm wiegen sie ?



www.mathemonsterchen.de

8

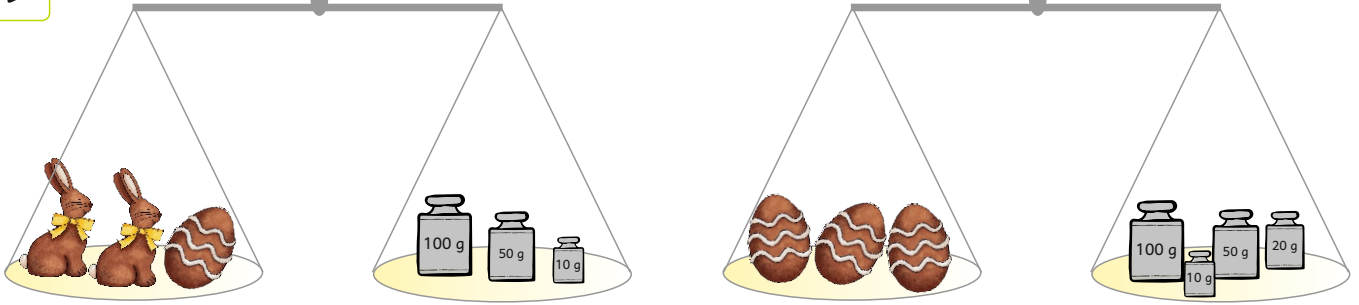
Wie viel Gramm wiegen sie ?





www.mathemonsterchen.de

9

Wie viel Gramm wiegen sie ?




 = g


 = g

www.mathemonsterchen.de

10





















Wie viel Gramm wiegen sie ?



 = g

 = g

www.mathemonsterchen.de

1	 = <u> 300 </u> g	 = <u> 100 </u> g	2	 = <u> 180 </u> g	 = <u> 220 </u> g
3	 = <u> 250 </u> g	 = <u> 350 </u> g	4	 = <u> 160 </u> g	 = <u> 190 </u> g
5	 = <u> 150 </u> g	 = <u> 100 </u> g	6	 = <u> 90 </u> g	 = <u> 70 </u> g
7	 = <u> 250 </u> g	 = <u> 40 </u> g	8	 = <u> 90 </u> g	 = <u> 70 </u> g
9	 = <u> 50 </u> g	 = <u> 60 </u> g	10	 = <u> 130 </u> g	 = <u> 70 </u> g