


① Setze die passenden Rechenzeichen ein.



$16 \bigcirc 14 = 70 \bigcirc 40$

$14 \bigcirc 7 = 10 \bigcirc 8$

$3 \bigcirc 4 = 2 \bigcirc 6$


$20 \bigcirc 10 = 7 \bigcirc 3$

$60 \bigcirc 6 = 2 \bigcirc 5$

$6 \bigcirc 3 = 40 \bigcirc 22$

$6 \bigcirc 3 = 45 \bigcirc 5$

$30 \bigcirc 25 = 25 \bigcirc 5$



www.mathemonsterchen.de

② Setze die passenden Rechenzeichen ein.



$50 \bigcirc 10 = 70 \bigcirc 30$

$30 \bigcirc 14 = 4 \bigcirc 4$

$6 \bigcirc 10 = 35 \bigcirc 25$


$15 \bigcirc 16 = 20 \bigcirc 11$

$15 \bigcirc 13 = 4 \bigcirc 70$

$18 \bigcirc 6 = 30 \bigcirc 10$


$90 \bigcirc 10 = 8 \bigcirc 1$

$3 \bigcirc 3 = 81 \bigcirc 9$



www.mathemonsterchen.de

③ Setze die passenden Rechenzeichen ein.



$90 \bigcirc 38 = 21 \bigcirc 31$

$21 \bigcirc 20 = 60 \bigcirc 19$

$80 \bigcirc 10 = 4 \bigcirc 2$


$25 \bigcirc 5 = 35 \bigcirc 30$

$25 \bigcirc 18 = 42 \bigcirc 6$


$4 \bigcirc 5 = 2 \bigcirc 10$

$4 \bigcirc 9 = 40 \bigcirc 4$

$3 \bigcirc 5 = 32 \bigcirc 4$



④ Setze die passenden Rechenzeichen ein.



$30 \bigcirc 15 = 37 \bigcirc 22$

$9 \bigcirc 6 = 8 \bigcirc 7$

$4 \bigcirc 9 = 19 \bigcirc 17$


$48 \bigcirc 6 = 72 \bigcirc 9$

$70 \bigcirc 30 = 5 \bigcirc 8$


$4 \bigcirc 1 = 20 \bigcirc 5$

$8 \bigcirc 6 = 2 \bigcirc 7$

$70 \bigcirc 7 = 9 \bigcirc 1$



① Setze die passenden Rechenzeichen ein.



$$16 \oplus 14 = 70 \ominus 40$$

$$14 \div 7 = 10 \ominus 8$$

$$3 \cdot 4 = 2 \cdot 6$$


$$20 \ominus 10 = 7 \oplus 3$$

$$60 \div 6 = 2 \cdot 5$$

$$6 \cdot 3 = 40 \ominus 22$$

$$6 \oplus 3 = 45 \div 5$$

$$30 \ominus 25 = 25 \div 5$$



www.mathemonsterchen.de

② Setze die passenden Rechenzeichen ein.



$$50 \ominus 10 = 70 \ominus 30$$

$$30 \ominus 14 = 4 \cdot 4$$

$$6 \cdot 10 = 35 \oplus 25$$


$$15 \oplus 16 = 20 \oplus 11$$

$$15 \oplus 13 = 4 \cdot 7$$

$$18 \div 6 = 30 \div 10$$


$$90 \div 10 = 8 \oplus 1$$

$$3 \cdot 3 = 81 \div 9$$



www.mathemonsterchen.de

③ Setze die passenden Rechenzeichen ein.



$$90 \ominus 38 = 21 \oplus 31$$

$$21 \oplus 20 = 60 \ominus 19$$

$$80 \div 10 = 4 \cdot 2$$


$$25 \div 5 = 35 \ominus 30$$

$$25 \ominus 18 = 42 \div 6$$

$$4 \cdot 5 = 2 \cdot 10$$


$$4 \cdot 9 = 40 \ominus 4$$

$$3 \oplus 5 = 32 \div 4$$



www.mathemonsterchen.de

④ Setze die passenden Rechenzeichen ein.



$$30 \ominus 15 = 37 \ominus 22$$

$$9 \oplus 6 = 8 \oplus 7$$

$$4 \cdot 9 = 19 \oplus 17$$


$$48 \div 6 = 72 \div 9$$

$$70 \ominus 30 = 5 \cdot 8$$

$$4 \cdot 1 = 20 \div 5$$

$$8 \oplus 6 = 2 \cdot 7$$

$$70 \div 7 = 9 \oplus 1$$



www.mathemonsterchen.de