


Domino:  
Finde  
die passende  
Bruchzahl.




[www.mathemonsterchen.de](http://www.mathemonsterchen.de)




$$\frac{2}{3}$$




$$\frac{7}{10}$$




$$\frac{2}{5}$$




$$\frac{3}{5}$$




$$\frac{5}{7}$$



$$\frac{7}{8}$$




$$\frac{1}{4}$$




$$\frac{5}{9}$$




$$\frac{4}{5}$$




$$\frac{4}{7}$$




$$\frac{1}{7}$$




$\frac{3}{4}$




$\frac{1}{2}$




$\frac{1}{5}$



$\frac{2}{7}$




$\frac{3}{10}$




$\frac{1}{6}$




$\frac{3}{8}$



$\frac{5}{6}$




$\frac{1}{10}$



$\frac{1}{8}$



$\frac{5}{8}$



$\frac{1}{3}$

